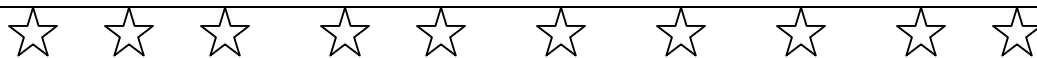


Use a pencil to draw circles around the groups. Name: \_\_\_\_\_




Divide 10 stars into groups of 2. How many groups? \_\_\_\_\_  $10 \div 2 =$



Divide 14 diamonds into groups of 2. How many groups? \_\_\_\_\_  $14 \div 2 =$



Divide 12 triangles into groups of 3. How many groups? \_\_\_\_\_  $12 \div 3 =$




Divide 12 hearts into groups of 4. How many groups? \_\_\_\_\_  $12 \div 4 =$



Divide 8 happy faces into groups of 2. How many groups? \_\_\_\_\_  $8 \div 2 =$



Divide 9 sad faces into groups of 3. How many groups? \_\_\_\_\_  $9 \div 3 =$



Divide 12 squares into groups of 3. How many groups? \_\_\_\_\_  $12 \div 3 =$



Divide 8 glasses into groups of 2. How many groups? \_\_\_\_\_  $8 \div 2 =$