


Use a pencil to draw circles around the groups. Name: \_\_\_\_\_



Divide 8 stars into groups of 2. How many groups? \_\_\_\_\_  $8 \div 2 =$



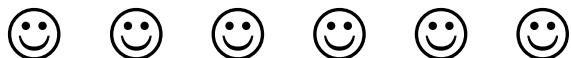
Divide 6 diamonds into groups of 2. How many groups? \_\_\_\_\_  $6 \div 2 =$



Divide 4 triangles into groups of 2. How many groups? \_\_\_\_\_  $4 \div 2 =$




Divide 10 hearts into groups of 5. How many groups? \_\_\_\_\_  $10 \div 5 =$



Divide 6 happy faces into groups of 2. How many groups? \_\_\_\_\_  $6 \div 2 =$



Divide 12 sad faces into groups of 3. How many groups? \_\_\_\_\_  $12 \div 3 =$



Divide 12 squares into groups of 4. How many groups? \_\_\_\_\_  $12 \div 4 =$



Divide 8 glasses into groups of 4. How many groups? \_\_\_\_\_  $8 \div 4 =$